

© International Baccalaureate Organization 2025

All rights reserved. No part of this product may be reproduced in any form or by any electronic or mechanical means, including information storage and retrieval systems, without the prior written permission from the IB. Additionally, the license tied with this product prohibits use of any selected files or extracts from this product. Use by third parties, including but not limited to publishers, private teachers, tutoring or study services, preparatory schools, vendors operating curriculum mapping services or teacher resource digital platforms and app developers, whether fee-covered or not, is prohibited and is a criminal offense.

More information on how to request written permission in the form of a license can be obtained from <https://ibo.org/become-an-ib-school/ib-publishing/licensing/applying-for-a-license/>.

© Organisation du Baccalauréat International 2025

Tous droits réservés. Aucune partie de ce produit ne peut être reproduite sous quelque forme ni par quelque moyen que ce soit, électronique ou mécanique, y compris des systèmes de stockage et de récupération d'informations, sans l'autorisation écrite préalable de l'IB. De plus, la licence associée à ce produit interdit toute utilisation de tout fichier ou extrait sélectionné dans ce produit. L'utilisation par des tiers, y compris, sans toutefois s'y limiter, des éditeurs, des professeurs particuliers, des services de tutorat ou d'aide aux études, des établissements de préparation à l'enseignement supérieur, des fournisseurs de services de planification des programmes d'études, des gestionnaires de plateformes pédagogiques en ligne, et des développeurs d'applications, moyennant paiement ou non, est interdite et constitue une infraction pénale.

Pour plus d'informations sur la procédure à suivre pour obtenir une autorisation écrite sous la forme d'une licence, rendez-vous à l'adresse <https://ibo.org/become-an-ib-school/ib-publishing/licensing/applying-for-a-license/>.

© Organización del Bachillerato Internacional, 2025

Todos los derechos reservados. No se podrá reproducir ninguna parte de este producto de ninguna forma ni por ningún medio electrónico o mecánico, incluidos los sistemas de almacenamiento y recuperación de información, sin la previa autorización por escrito del IB. Además, la licencia vinculada a este producto prohíbe el uso de todo archivo o fragmento seleccionado de este producto. El uso por parte de terceros —lo que incluye, a título enunciativo, editoriales, profesores particulares, servicios de apoyo académico o ayuda para el estudio, colegios preparatorios, desarrolladores de aplicaciones y entidades que presten servicios de planificación curricular u ofrezcan recursos para docentes mediante plataformas digitales—, ya sea incluido en tasas o no, está prohibido y constituye un delito.

En este enlace encontrará más información sobre cómo solicitar una autorización por escrito en forma de licencia: <https://ibo.org/become-an-ib-school/ib-publishing/licensing/applying-for-a-license/>.

Mathematics: applications and interpretation
Standard level
Paper 1

10 November 2025

Zone A afternoon | **Zone B** afternoon | **Zone C** afternoon

Candidate session number

1 hour 30 minutes

--	--	--	--	--	--	--	--	--	--

Instructions to candidates

- Write your session number in the boxes above.
- Do not open this examination paper until instructed to do so.
- A graphic display calculator is required for this paper.
- Answer all questions.
- Answers must be written within the answer boxes provided.
- Unless otherwise stated in the question, all numerical answers should be given exactly or correct to three significant figures.
- A clean copy of the **mathematics: applications and interpretation SL formula booklet** is required for this paper.
- The maximum mark for this examination paper is **[80 marks]**.



Please **do not** write on this page.

Answers written on this page
will not be marked.



Answers must be written within the answer boxes provided. Full marks are not necessarily awarded for a correct answer with no working. Answers must be supported by working and/or explanations. Solutions found from a graphic display calculator should be supported by suitable working. For example, if graphs are used to find a solution, you should sketch these as part of your answer. Where an answer is incorrect, some marks may be given for a correct method, provided this is shown by written working. You are therefore advised to show all working.

1. [Maximum mark: 5]

The first three terms of a geometric sequence are 2, 6 and 18.

- (a) Write down the common ratio, r . [1]
- (b) Find the 8th term of the sequence. [2]
- (c) Find the sum of the first 10 terms of the sequence. [2]

.....

.....

.....

.....

.....

.....

.....

.....

.....

.....

.....


.....



2. [Maximum mark: 6]

A digital caliper is used to measure the diameter of a spherical ball.

diagram not to scale



The digital caliper displays the diameter of the ball as 8.4 cm, and is accurate to one decimal place.

(a) (i) Write down the smallest possible diameter of the ball.

(ii) Hence, calculate the smallest possible volume of the ball.

[4]

The exact diameter of the ball is 8.38 cm.

(b) Calculate the percentage error in the measurement of 8.4 cm, as shown on the digital caliper.

[2]

(This question continues on the following page)



3. [Maximum mark: 6]

TurboEats is a food delivery company that charges customers \$0.80 per kilometre plus a fixed amount of \$1.50. Their delivery charge, T in \$, is represented by the function

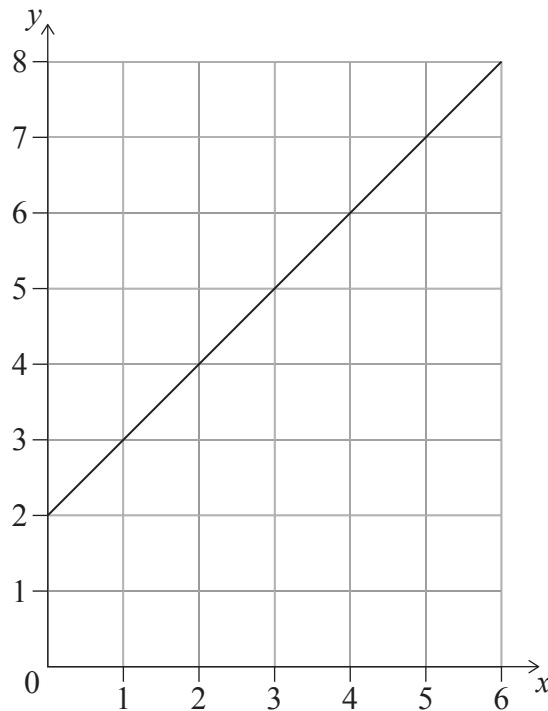
$$T(x) = 0.80x + 1.50, \text{ for } x \geq 0,$$

where x is the distance in kilometres from where the food is picked up to where it is delivered.

Lorena's home is 5.1 km from a pizza café.

- (a) Find the charge for TurboEats to deliver a pizza from the café to her home. [2]

A second food delivery company, GogoDart, charges customers according to the function $G(x) = ax + b$, for $x \geq 0$. Their charges for the first 6 km are shown in the following graph of $y = G(x)$. The line passes through integer grid points.



- (b) (i) Write down the value of a .
(ii) Write down the value of b . [2]
(c) Explain why TurboEats is **always** cheaper than GogoDart. [2]

(This question continues on the following page)



4. [Maximum mark: 7]

Under controlled driving conditions, Jacob investigated the fuel efficiency of his car when using premium fuel compared to standard fuel.

Jacob recorded the distance travelled per litre (km L^{-1}) using standard fuel for six days and then using premium fuel for seven days. This information is shown in the following tables.

	Standard fuel						
Distance travelled per litre (km L^{-1})	8.1	8.2	7.9	8.2	7.9	8.0	

	Premium fuel						
Distance travelled per litre (km L^{-1})	8.3	8.4	8.1	8.3	8.2	8.0	8.2

At the 5% significance level, Jacob performs a t -test to determine whether there is sufficient evidence that his car travels further using premium fuel compared to standard fuel.

- (a) State one mathematical assumption made for this test to be valid. [1]
- (b) Write down the
 - (i) null hypothesis;
 - (ii) alternative hypothesis. [2]
- (c) (i) Find the p -value.
- (ii) State your conclusion to the test in context. Justify your answer. [4]

(This question continues on the following page)



Please **do not** write on this page.

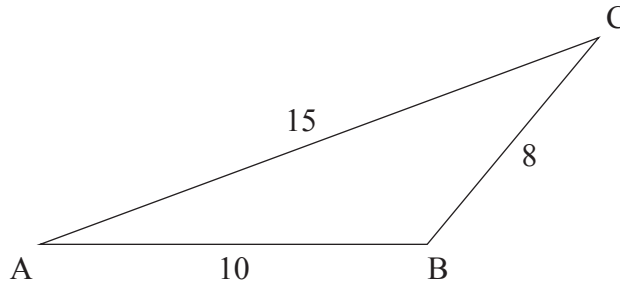
Answers written on this page
will not be marked.



6. [Maximum mark: 8]

Triangle ABC has sides of length $AB = 10$ cm, $BC = 8$ cm and $AC = 15$ cm, as shown in the diagram.

diagram not to scale

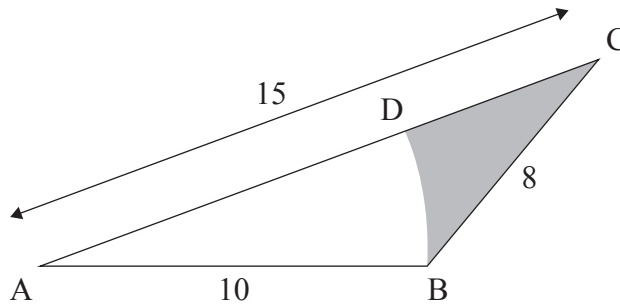


(a) Find the size of \hat{BAC} .

[3]

The circular arc BD, with centre A, is drawn inside the triangle, such that D lies on AC.

diagram not to scale



(b) Find the area of the shaded region.

[5]

(This question continues on the following page)

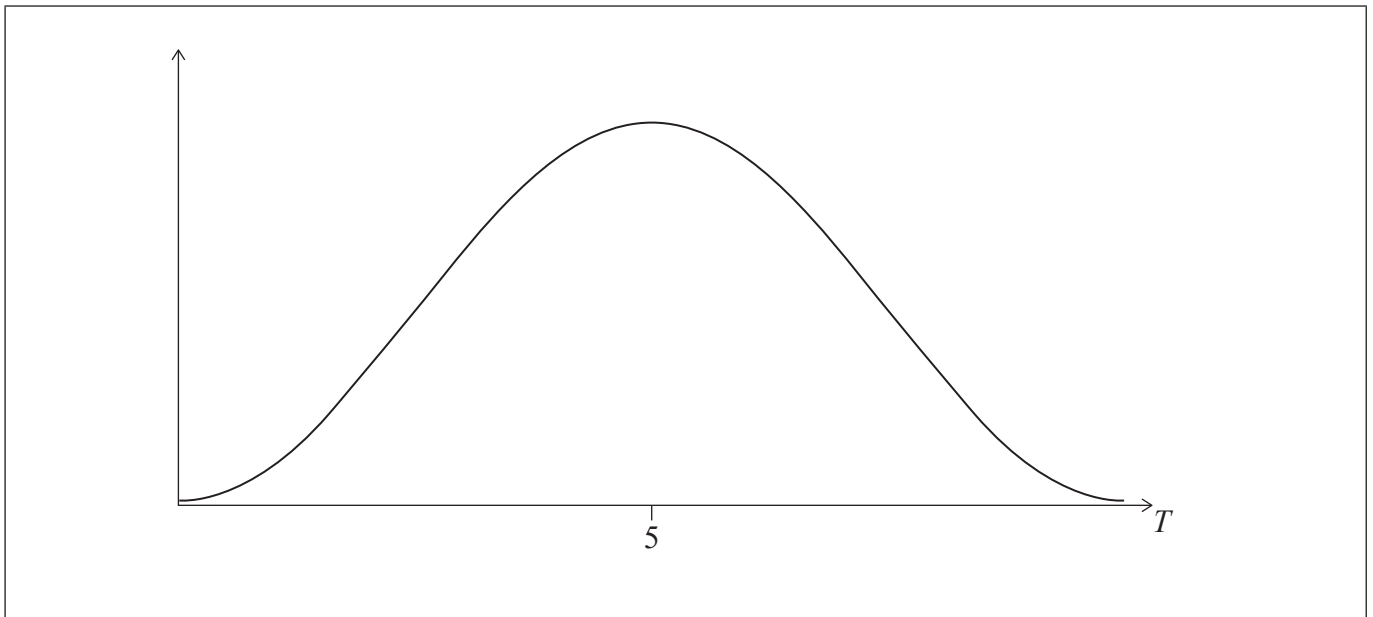


7. [Maximum mark: 5]

In a reaction test, the time, T seconds, taken to complete the test can be modelled by a normal distribution with a mean of 5 seconds and a standard deviation of 1 second.

- (a) Find the probability that a randomly selected person completes the reaction test in less than 4 seconds. [2]

The graph of the distribution of T is shown in the following diagram.



The slowest 15% of participants will be given training to reduce their time to complete the test.

- (b) (i) Shade the region on the given diagram that corresponds to these participants.
(ii) Find the least time taken to complete the test by a person who will be given training. [3]

(This question continues on the following page)



Please **do not** write on this page.

Answers written on this page
will not be marked.



8. [Maximum mark: 8]

Sheena purchased a new mobile phone. The value of Sheena's mobile phone, V in Philippine Pesos (PHP), can be modelled by the function

$$V(t) = 2000 + 30\,000(e^{-kt}), \text{ for } t \geq 0,$$

where t is the time, in months, after the mobile phone was purchased.

(a) Calculate the value of the mobile phone when it was purchased. [2]

Ten months after it was purchased, the value of the mobile phone has decreased by 40%.

(b) Find the value of k . [4]

Sheena believes the value of the mobile phone will always be more than PHP 2000.

(c) (i) State a mathematical property of the graph of $y = V(t)$ that supports Sheena's belief.

(ii) State one contextual reason why Sheena's belief might be incorrect. [2]

.....

.....

.....

.....

.....

.....

.....

.....

.....

.....

.....

.....

.....

.....

.....

.....

.....

.....

.....

.....

.....

.....

.....



9. [Maximum mark: 7]

On a television quiz show, a contestant is asked **ten questions**. Each question is multiple choice with four possible options, only one of which is correct.

Xiaoyi is a contestant and randomly guesses each answer. Her answers to the questions are independent of each other.

(a) Find the probability that Xiaoyi

(i) answers exactly five questions correctly;

(ii) answers at least three questions correctly.

[4]

Xiaoyi answers all ten questions correctly and is offered the choice of two prizes:

- **Option A:** \$50 000 in cash
- **Option B:** Toss a biased two-sided coin where the probability of showing heads is 0.3 and the probability of showing tails is 0.7. If the outcome is heads, Xiaoyi will win \$500 000. If the outcome is tails, Xiaoyi will receive no money.

(b) Show that the expected value of Xiaoyi's winnings if she chooses **Option B** is \$150 000.

[2]

(c) State, giving a reason, whether Xiaoyi should choose **Option A** or **Option B**.

[1]

(This question continues on the following page)



10. [Maximum mark: 7]

At 12:05 pm, Navam starts draining water from a small reservoir into an empty pond.

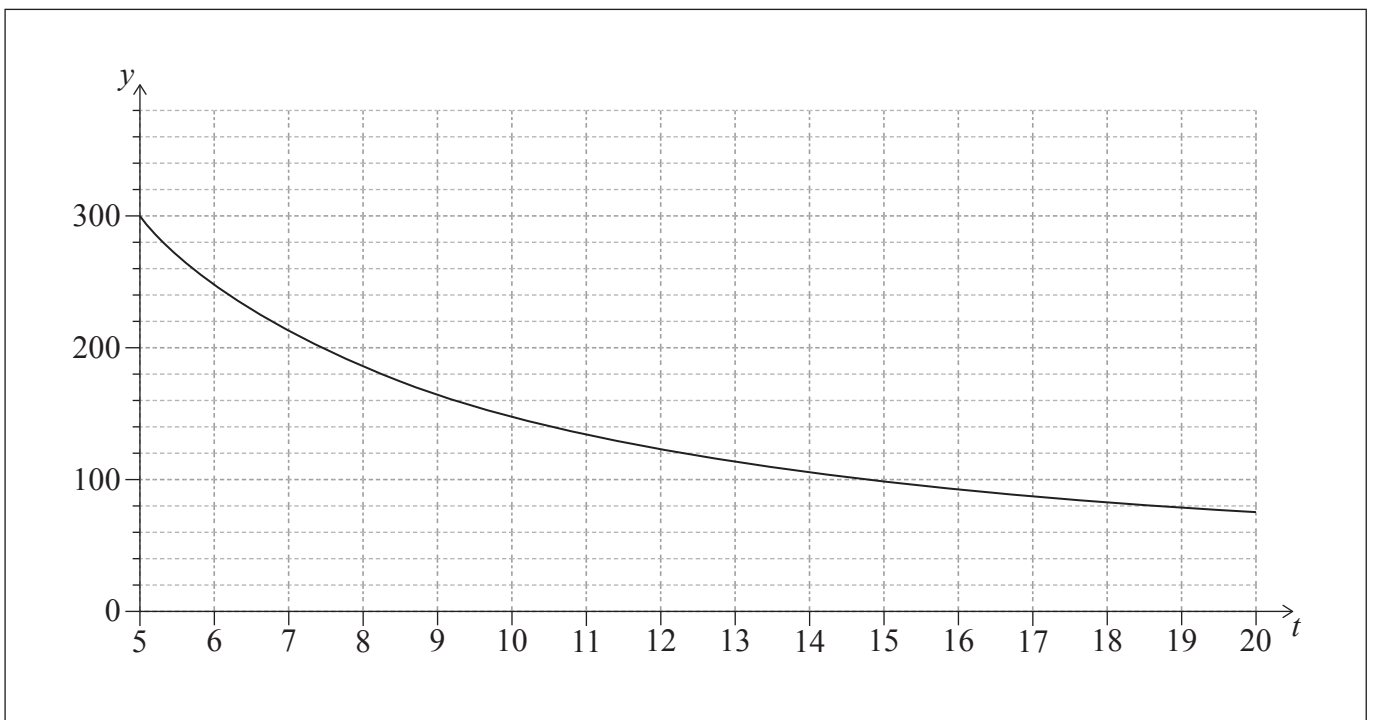
He controls the rate the water is drained so that the volume of water **remaining** in the reservoir, $V\text{ m}^3$, varies inversely with the time, t , where t is the number of minutes after 12:00 pm.

At 12:05 pm, the volume of water in the reservoir is 300 m^3 .

(a) Show that $V = \frac{1500}{t}$. [2]

(b) Find the value of t when the volume of water remaining in the reservoir equals the volume of water in the pond. [2]

The following diagram shows part of the graph of $y = V(t)$.



(c) On the same diagram, sketch the graph of $y = P(t)$, where P is the volume of water in the pond. [2]

(d) Write down an expression for $P(t)$. [1]

(This question continues on the following page)



Please **do not** write on this page.

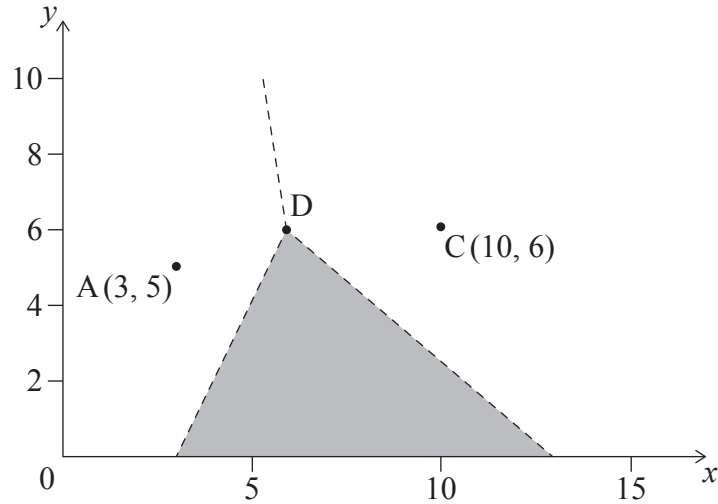
Answers written on this page
will not be marked.



28EP22

12. [Maximum mark: 7]

The city of Benoulli has three police stations, located at $A(3, 5)$, $C(10, 6)$ and B . In the following Voronoi diagram, A and C represent sites. The dashed lines represent the edges and the cell for site B is shaded.



(a) State the geometrical significance of

(i) the shaded region;

(ii) point D .

[2]

The equation of the edge between A and B is $y = 2x - 6$. The equation of the edge between C and B is $y = -x + 13$.

(b) Calculate the coordinates of B .

[5]

(This question continues on the following page)



Disclaimer:

Content used in IB assessments is taken from authentic, third-party sources. The views expressed within them belong to their individual authors and/or publishers and do not necessarily reflect the views of the IB. Any trademarks™ or registered® trademarks included are used for illustrative purposes only, and use does not imply any affiliation with or endorsement by the International Baccalaureate.

References:

2. Pepifoto, 2021. *Digital caliper measuring screw*. [image online] Available at: <https://www.gettyimages.co.uk/detail/photo/digital-caliper-measuring-screw-royalty-free-image/1302481493?phrase=digital+caliper+hand&adppopup=true> Images [Accessed 20 November 2024]. Source adapted.

Lesikvit, 2024. *White round sphere or 3d ball*. [image online] Available at: <https://www.gettyimages.co.uk/detail/illustration/white-round-sphere-or-3d-ball-royalty-free-illustration/2157157426?phrase=grey+sphere&adppopup=true> Images [Accessed 20 November 2024]. Source adapted.



28EP26

Please **do not** write on this page.

Answers written on this page
will not be marked.



28EP27

Please **do not** write on this page.

Answers written on this page
will not be marked.



28EP28